



Oxford Cambridge and RSA

Thursday 13 June 2019 – Afternoon

AS Level Further Mathematics B (MEI)

Y415/01 Mechanics b

Time allowed: 1 hour 15 minutes



You must have:

- Printed Answer Booklet
- Formulae Further Mathematics B (MEI)

You may use:

- a scientific or graphical calculator

INSTRUCTIONS

- Use black ink. HB pencil may be used for graphs and diagrams only.
- Answer **all** the questions.
- **Write your answer to each question in the space provided in the Printed Answer Booklet.** If additional space is required, you should use the lined page(s) at the end of the Printed Answer Booklet. The question number(s) must be clearly shown.
- You are permitted to use a scientific or graphical calculator in this paper.
- Final answers should be given to a degree of accuracy appropriate to the context.
- The acceleration due to gravity is denoted by $g \text{ m s}^{-2}$. Unless otherwise instructed, when a numerical value is needed, use $g = 9.8$.

INFORMATION

- The total number of marks for this paper is **60**.
- The marks for each question are shown in brackets [].
- You are advised that an answer may receive **no marks** unless you show sufficient detail of the working to indicate that a correct method is used. You should communicate your method with correct reasoning.
- The Printed Answer Booklet consists of **12** pages. The Question Paper consists of **8** pages.

Answer **all** the questions.

- 1 A small object of mass 5 kg is attached to one end of each of two identical parallel light elastic strings. The upper ends of both strings are attached to a horizontal ceiling. The object hangs in equilibrium at R, with the extension of each string being 0.1 m, as shown in Fig. 1.

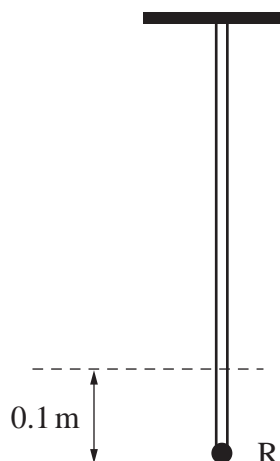


Fig. 1

- (a) Find the stiffness of each string. [3]

One of the strings is now removed and the object initially falls downwards. The object does not return to R at any point in the subsequent motion.

- (b) Suggest a reason why the object does not return to R. [1]

- 2 A particle P of mass m travels in a straight line on a smooth horizontal surface. At time t , P is a distance x from a fixed point O and is moving with speed v away from O. A horizontal force of magnitude $3mt$ acts on P, in a direction away from O.

- (a) Show that $\frac{d^2x}{dt^2} = 3t$. [1]

- (b) Verify that the general solution of this differential equation is $x = \frac{1}{2}t^3 + At + k$, where A and k are constants. [2]

- (c) Given that $x = 6$ and $v = 12$ when $t = 1$, find the values of A and k . [4]

- 3 A particle Q of mass m moves in a horizontal plane under the action of a single force \mathbf{F} .

At time t , Q has velocity $\begin{pmatrix} 2 \\ 3t - 2 \end{pmatrix}$.

- (a) Find an expression for \mathbf{F} in terms of m . [2]

At time t , the displacement of Q is given by $\mathbf{r} = \begin{pmatrix} x \\ y \end{pmatrix}$. When $t = 1$, Q is at the point with position vector $\begin{pmatrix} 4 \\ -4 \end{pmatrix}$.

- (b) Find the equation of the path of Q, giving your answer in the form $y = ax^2 + bx + c$, where a , b and c are constants to be determined. [7]

- (c) What can you deduce about the path of Q from the value of the constant c you found in part (b)? [1]

- 4 Two uniform discs, A of mass 0.2 kg and B of mass 0.5 kg, collide with smooth contact while moving on a smooth horizontal surface.

Immediately before the collision, A is moving with speed 0.5 ms^{-1} at an angle α with the line of centres, where $\sin \alpha = 0.6$, and B is moving with speed 0.3 ms^{-1} at right angles to the line of centres. A straight smooth vertical wall is situated to the right of B, perpendicular to the line of centres, as shown in Fig. 4. The coefficient of restitution between A and B is 0.75.

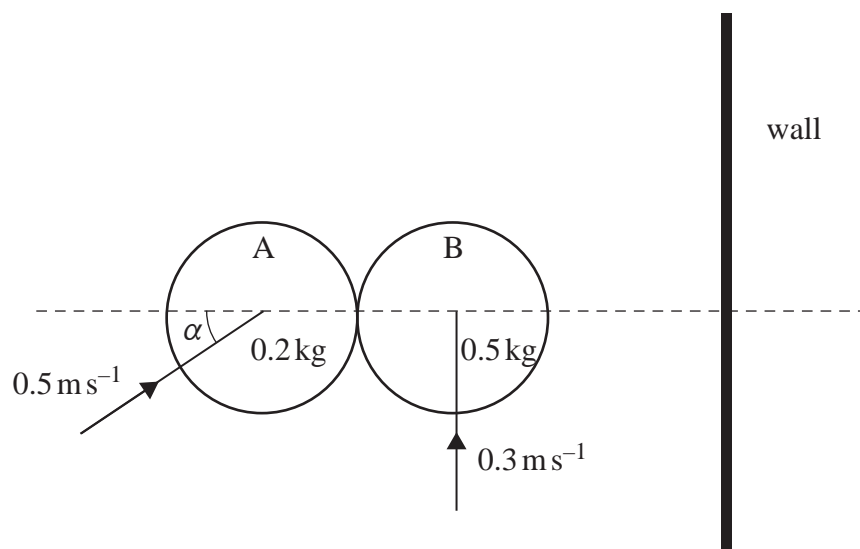


Fig. 4

- (a) Find the speeds of A and B immediately after the collision. [8]

- (b) Explain why there could be a second collision between A and B if B rebounds from the wall with sufficient speed. [1]

- (c) Find the range of values of the coefficient of restitution between B and the wall for which there will be a second collision between A and B. [3]

- (d) How does your answer to part (b) change if the contact between B and the wall is not smooth? [1]

- 5 Fig. 5 shows the curve with equation $y = -x^2 + 4x + 2$. The curve intersects the x -axis at P and Q. The region bounded by the curve, the x -axis, the y -axis and the line $x = 4$ is occupied by a uniform lamina L. The horizontal base of L is OA, where A is the point $(4, 0)$.

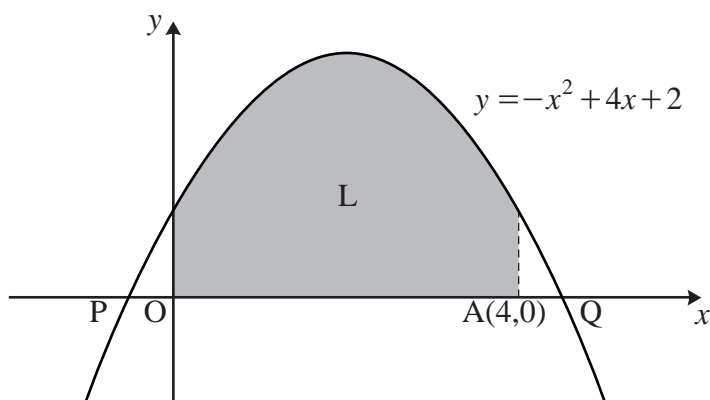


Fig. 5

- (a) (i) Explain why the centre of mass of L lies on the line $x = 2$. [1]

(ii) In this question you must show detailed reasoning.

Find the y -coordinate of the centre of mass of L. [7]

- (b) L is freely suspended from A. Find the angle AO makes with the vertical. [2]

The region bounded by the curve and the x -axis is now occupied by a uniform lamina M. The horizontal base of M is PQ.

- (c) Explain how the position of the centre of mass of M differs from the position of the centre of mass of L. [2]

- 6 A smooth solid hemisphere of radius a is fixed with its plane face in contact with a horizontal surface.

The highest point on the hemisphere is H, and the centre of its base is O. A particle of mass m is held at a point S on the surface of the hemisphere such that angle HOS is 30° , as shown in Fig. 6. The particle is projected from S with speed $0.8\sqrt{ag}$ along the surface of the hemisphere towards H.

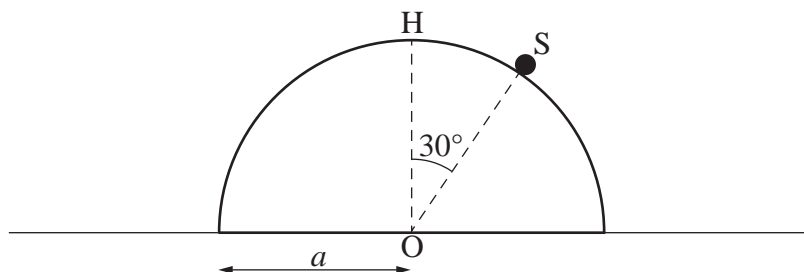


Fig. 6

- (a) Show that the particle passes through H without leaving the surface of the hemisphere. [4]

After passing through H, the particle passes through a point Q on the surface of the hemisphere, where angle HOQ = θ° .

- (b) State, in terms of g and θ , the tangential component of the acceleration of the particle when it is at Q. [1]

The particle loses contact with the hemisphere at Q and subsequently lands on the horizontal surface at a point L.

- (c) Find the value of $\cos \theta$ correct to 3 significant figures. [4]
- (d) Show that $OL = ka$, where k is to be found correct to 3 significant figures. [5]

END OF QUESTION PAPER

BLANK PAGE

BLANK PAGE

OCR

Oxford Cambridge and RSA

Copyright Information

OCR is committed to seeking permission to reproduce all third-party content that it uses in its assessment materials. OCR has attempted to identify and contact all copyright holders whose work is used in this paper. To avoid the issue of disclosure of answer-related information to candidates, all copyright acknowledgements are reproduced in the OCR Copyright Acknowledgements Booklet. This is produced for each series of examinations and is freely available to download from our public website (www.ocr.org.uk) after the live examination series.

If OCR has unwittingly failed to correctly acknowledge or clear any third-party content in this assessment material, OCR will be happy to correct its mistake at the earliest possible opportunity.

For queries or further information please contact The OCR Copyright Team, The Triangle Building, Shaftesbury Road, Cambridge CB2 8EA.

OCR is part of the Cambridge Assessment Group; Cambridge Assessment is the brand name of University of Cambridge Local Examinations Syndicate (UCLES), which is itself a department of the University of Cambridge.